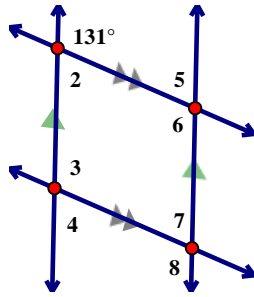


1. Solve.

a) $m\angle 6 =$ _____

b) $m\angle 7 =$ _____

c) $m\angle 4 =$ _____

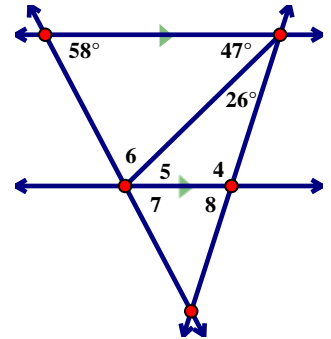


2. Solve

a) $m\angle 7 =$ _____

b) $m\angle 5 =$ _____

c) $m\angle 6 =$ _____

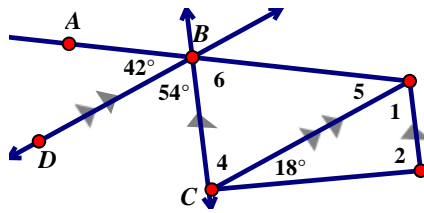


3. Solve

a) $m\angle 5 =$ _____

b) $m\angle 1 =$ _____

c) $m\angle 4 =$ _____



4. Solve

a) $m\angle 3 =$ _____

b) $m\angle 5 =$ _____

c) $m\angle 1 =$ _____

