

Geometry

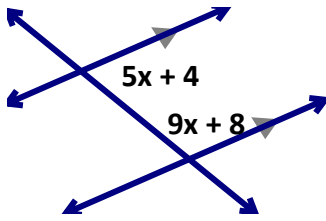
Unit One B: Post-Assessment Parallel Line Practice (HW24)

Name: _____

Date: _____ Period: _____

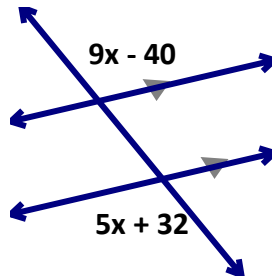
Solve for the unknown values. Include a reason supporting the equation you write for each problem.

a) $x =$ _____



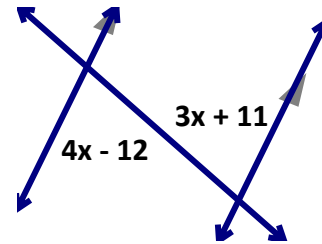
Reason: _____

b) $x =$ _____



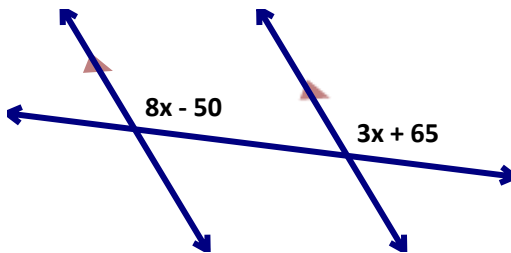
Reason: _____

c) $x =$ _____



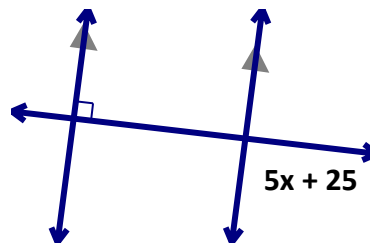
Reason: _____

d) $x =$ _____



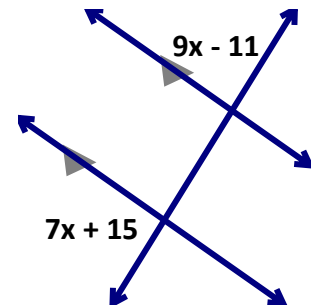
Reason: _____

e) $x =$ _____



Reason: _____

f) $x =$ _____



Reason: _____
