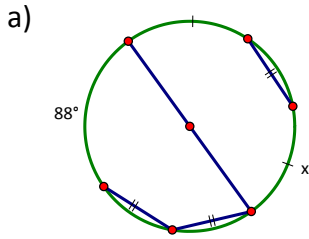


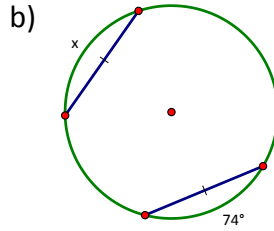
Geometry (G.C.2)
Unit Five: Chords (HW3)

Name: _____
 Date: _____ Period: _____

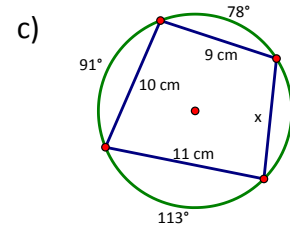
1. Determine the requested value.



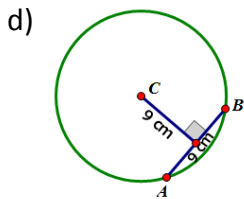
x = _____



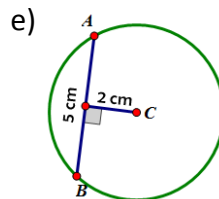
x = _____



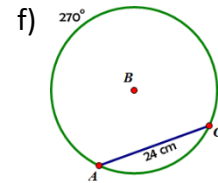
x = _____



AC = _____ (2 dec.)

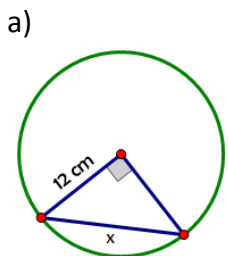


AC = _____ (2 dec.)

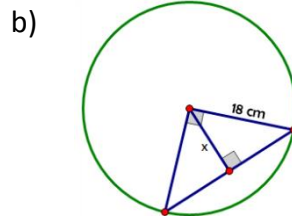


AB = _____ (E)

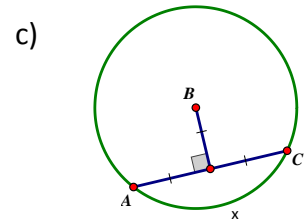
2. Determine the requested value.



x = _____ (E)



x = _____ (E)



x = _____

