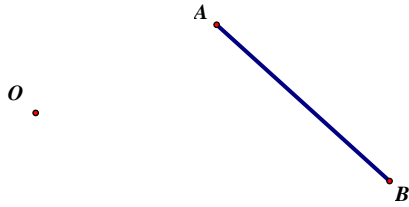


Examples:

1. $D_{O,2}(\overline{AB})$

ENLARGEMENT

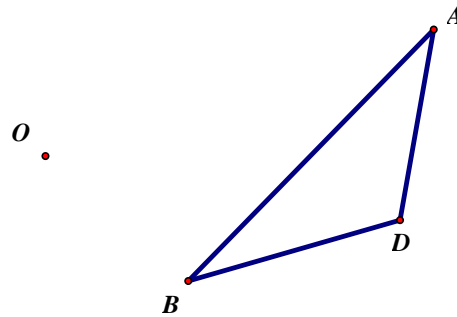
REDUCTION



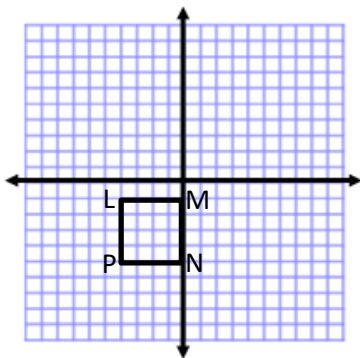
2. $D_{O,-2}(\triangle ABD)$

ENLARGEMENT

REDUCTION



3. $(x, y) \rightarrow (-2x, -2y)$



4. Find the center of dilation and scale factor if the preimage is the dashed figure and the image is the solid figure.

