

Geometry (G.SRT.5)

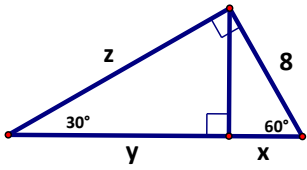
Unit Two: Finding Areas (HW15)

Name: _____

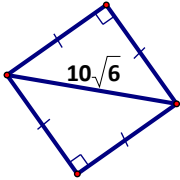
Date: _____ Period: _____

Find the area of each shape. Also solve for the measurements labeled with variables if present.

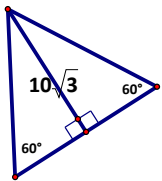
1.



2.



3.

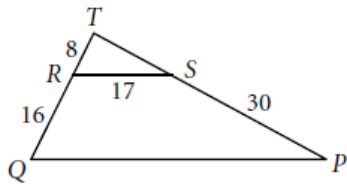


Review:

4. $\triangle TRS \sim \triangle TQP$

$TS = \underline{\hspace{2cm}}$

$QP = \underline{\hspace{2cm}}$



5. Are the triangles pictures below similar? Why or why not?

