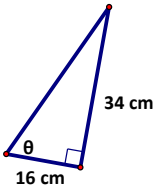
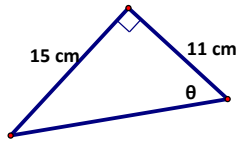


1. Solve for the missing information. (Round all final answers to 2 decimal places)

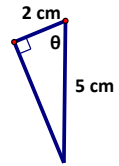
a)



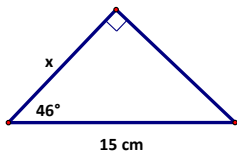
b)



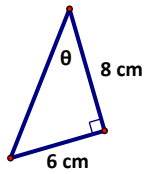
c)



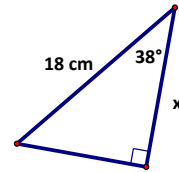
d)



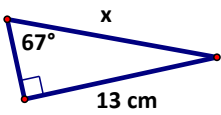
e)



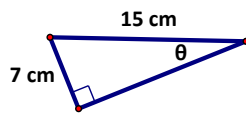
f)



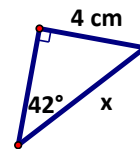
g)



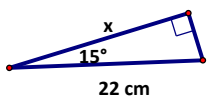
h)



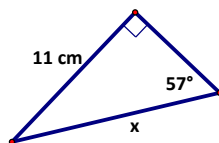
i)



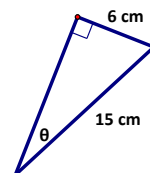
j)



k)

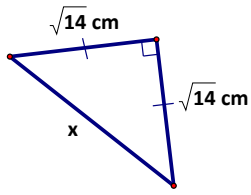


l)

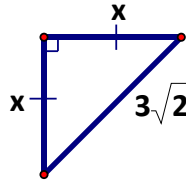


2. Solve for the missing measures in each diagram. Leave answers in simplified, radical form.

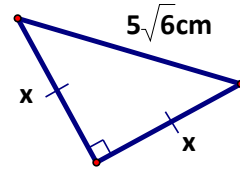
a)



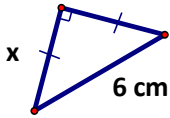
b)



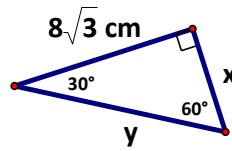
c)



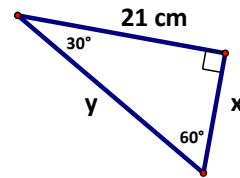
d)



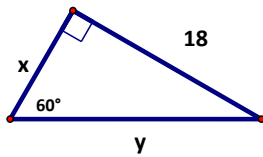
e)



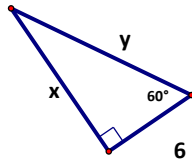
f)



g)



h)



i)

