

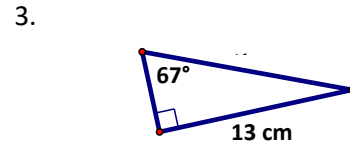
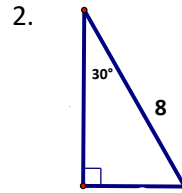
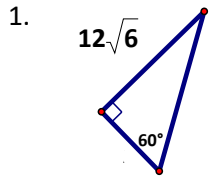
Geometry (G.SRT.7-8)

Unit Two: Post-Assessment Non-Right Trig Introduction (HW27)

Name: _____

Date: _____ Period: _____

Solve for the area of each triangle below. Use the methods learned in the last unit to solve for missing bases and/or heights when necessary. Leave answers in reduced, radical form when appropriate.



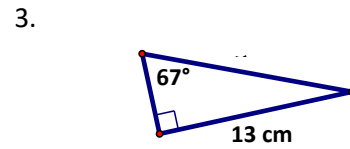
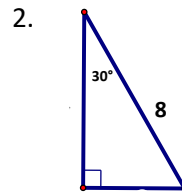
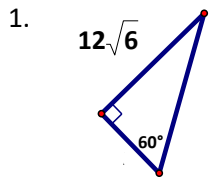
Geometry (G.SRT.7-8)

Unit Two: Post-Assessment Non-Right Trig Introduction (HW27)

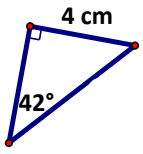
Name: _____

Date: _____ Period: _____

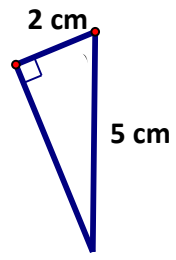
Solve for the area of each triangle below. Use the methods learned in the last unit to solve for missing bases and/or heights when necessary. Leave answers in reduced, radical form when appropriate.



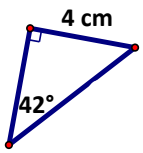
4.



5.



4.



5.

